

Year 2 Homework - Autumn 1: Week 4

English

In English this week, we have been answering questions about a text (1b). Have a go at this comprehension activity at home.



A pirate is a person who attacks and robs ships.

Pirate Ships

Some pirate captains would start with a small ship and crew. Once they had captured a bigger ship, they would use that instead.



Famous Pirates from Long Ago

John 'Jack' Rackham
– He made the Jolly Roger flag.

Bartholomew Roberts
– He stole 400 ships!

2. This flag is called...



- ☐ The Jolly Jimmy
☐ The Jolly Robert
☐ The Jolly Pirate
☐ The Jolly Roger

1. A pirate is a person who...

- ☐ eats lots of pies
☐ catches rats
☐ attacks and robs ships
☐ bakes bread

Pirate Dress



Pirates Today

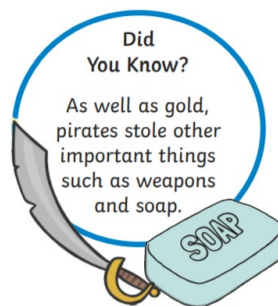
Pirates can still be found today, in Africa, but they don't dress the same as they did long ago.

3. Pirates wore bandanas on their...

- ☐ heads
☐ feet
☐ hands
☐ legs

Did You Know?

As well as gold, pirates stole other important things such as weapons and soap.



4. True or False? Pirates stole other

helpful items, such as soap.

- ☐ True
☐ False

Maths

In Maths, this week we have focused on adding a 2-digit number to a 2-digit number using a 100 square.

$$23 + 16 =$$

$$31 + 15 =$$

$$32 + 25 =$$

1	2	3	4	5	6	7	8	9	10
11	12	13	14	15	16	17	18	19	20
21	22	23	24	25	26	27	28	29	30
31	32	33	34	35	36	37	38	39	40
41	42	43	44	45	46	47	48	49	50
51	52	53	54	55	56	57	58	59	60
61	62	63	64	65	66	67	68	69	70
71	72	73	74	75	76	77	78	79	80
81	82	83	84	85	86	87	88	89	90
91	92	93	94	95	96	97	98	99	100

e.g $23 + 16 = 39$

Circle the biggest number.

Add the tens first

1 tens = 1 jump down

Then count the ones


6 ones = 6 jumps across.

$23 + 16 = 39$

Year 2 Homework - Autumn 1: Week 4

English

This week in English, we have focused on Phase 4 sounds.



In English this week, we have been answering questions about a text (1b). Have a go at this comprehension activity at home.



A pirate is a person who attacks and robs ships.

Pirate Ships

Some pirate captains would start with a small ship and crew. Once they had captured a bigger ship, they would use that instead.



Famous Pirates from Long Ago
John 'Jack' Rackham
– He made the Jolly Roger flag.

Bartholomew Roberts
– He stole 400 ships!

1. A pirate is a person who...

- ☐ eats lots of pies
- ☐ catches rats
- ☐ attacks and robs ships
- ☐ bakes bread

2. This flag is called...

- ☐ The Jolly Jimmy
- ☐ The Jolly Robert
- ☐ The Jolly Pirate
- ☐ The Jolly Roger



Maths

In Maths, this week we have focused on adding a 1-digit number to a 2-digit number.

1	4	+	5	=				
1	3	+	6	=				
2	4	+	4	=				

1	2	3	4	5	6	7	8	9	10
11	12	13	14	15	16	17	18	19	20
21	22	23	24	25	26	27	28	29	30
31	32	33	34	35	36	37	38	39	40
41	42	43	44	45	46	47	48	49	50
51	52	53	54	55	56	57	58	59	60
61	62	63	64	65	66	67	68	69	70
71	72	73	74	75	76	77	78	79	80
81	82	83	84	85	86	87	88	89	90
91	92	93	94	95	96	97	98	99	100

e.g $25 + 4 = 29$

Circle the biggest number.

Then count the ones

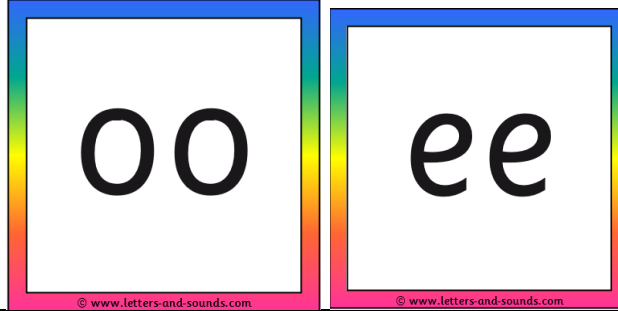
4 ones = 4 jumps across.

$25 + 4 = 29$

Year 2 Homework - Autumn 1: Week 4

English

This week in English we have focused on Phase 3 sounds.



In English this week, we have been answering questions about a text (1b). Have a go at this comprehension activity at home.



A pirate is a person who attacks and robs ships.

Pirate Ships

Some pirate captains would start with a small ship and crew. Once they had captured a bigger ship, they would use that instead.



Famous Pirates from Long Ago
John 'Jack' Rackham
– He made the Jolly Roger flag.
Bartholomew Roberts
– He stole 400 ships!

2. This flag is called...



1. A pirate is a person who...

- ☐ eats lots of pies
- ☐ catches rats
- ☐ attacks and robs ships
- ☐ bakes bread

- ☐ The Jolly Jimmy
- ☐ The Jolly Robert
- ☐ The Jolly Pirate
- ☐ The Jolly Roger

Maths

In Maths, this week we have focused on adding a 1-digit number to a 2-digit number.

$$14 + 5 =$$

$$13 + 6 =$$

$$24 + 4 =$$

1	2	3	4	5	6	7	8	9	10
11	12	13	14	15	16	17	18	19	20
21	22	23	24	25	26	27	28	29	30
31	32	33	34	35	36	37	38	39	40
41	42	43	44	45	46	47	48	49	50
51	52	53	54	55	56	57	58	59	60
61	62	63	64	65	66	67	68	69	70
71	72	73	74	75	76	77	78	79	80
81	82	83	84	85	86	87	88	89	90
91	92	93	94	95	96	97	98	99	100

e.g $25 + 4 = 29$

Circle the biggest number.

Then count the ones

4 ones = 4 jumps across.

$25 + 4 = 29$