
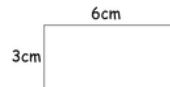
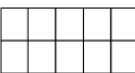





Homework: Stage 3 Week 8

Allow your child time to complete this on their own.

Mark it together and record your score out of 25. Colour in the box red, amber or green to show your score.

1. What is the missing number? 24 <input type="text"/> 32 <input type="text"/> 40		11. $48 \div 4 =$		23. How many millimetres are in two centimetres?	
2. What is the 6 worth in this number? 265		12. $7 \times 4 =$			
3. $536 + 10 =$		13. I buy 6 packs of balloons. I have 30 balloons. How many are in each pack?		22. What is the perimeter of this shape?	
4. $543 - 10 =$		14. $1 \times 8 =$			
5. $407 + 100 =$		15. What is the missing number? 89 99 <input type="text"/> 119 129		23. What is the perimeter of this shape?	
6. $753 - 100 =$		16. Find $\frac{1}{2}$ of 256			
7. $234 + 562 =$		17. What is $\frac{1}{4}$ of 48?		24. Draw the hands to show twenty minutes past four o'clock	
8. $567 + 354 =$		18. This shape is in tenths. Shade in $\frac{2}{5}$. 			
9. Double 16		19. Add the fractions. $\frac{3}{9} + \frac{5}{9}$		25. 	
10. What is the missing number? <input type="text"/> 17 = 17		20. Write the Smallest fraction. $\frac{1}{3}$ $\frac{1}{6}$ $\frac{1}{7}$ $\frac{1}{2}$			
				How long is the goldfish in cm?	
Score	125	Red I need more practice (0-10)	Amber I am getting There (11-19)	Green Super! I understand! (20-25)	

