



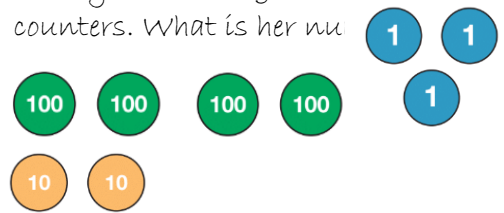





Homework: Stage 3 Week 5 Allow your child time to complete this on their own. Mark it together and record your score out of 25. Colour in the box red, amber or green to show your score.

1. Here is a number line from 0 - 1000 Draw an arrow to show <u>500</u>	8. $365 - 10$	18. $24 + 37 =$
	9. $234 + 7 =$	19. I buy 5 packs of balloons. I have 45 balloons. How many are in each pack?
2. Here is a number line from 0 - 1000 Draw an arrow to show <u>400</u>	10. $132 - 8 =$	20. The cup holds 250 millilitres of liquid. The jug holds 1 litre of liquid. How many more millilitres does the
	11. $400 + \underline{\hspace{1cm}} + 5 = 495$	jug hold? 
3. Here is a number line from 0 - 1000 Draw an arrow to show <u>250</u>	12. $40 \div 8 =$	21. Tom bought 3 cans of pop that were 75p each. How much did they cost in total? Give your answer in pounds and pence.
		
4. Betty is counting with place value counters. What is her nu	13. Put numbers in the boxes to make this statement correct.	23. What time does this clock show?
	$4\underline{\hspace{0.5cm}}6 > 43\underline{\hspace{0.5cm}}$	
5. Write Betty's number in words.	12. What is the missing number?	24. What will the time be in 15 minutes?
<hr/> <hr/>	$0 \quad 50 \quad 100 \quad \square \quad 200 \quad 250$	<hr/>
	13. $18 \times 3 =$	25. Circle the horizontal line.
6. Betty adds these counters to her counters. What number does	14. $9 \times 8 =$	
now?	15. $32 \div 4 =$	
		

$7.465 + 100 =$			$16.40 \div 8 =$				
			$17.3 \times \underline{\hspace{1cm}} = 15$				
Score /25		Red I need more practice (0-10)		Amber I am getting There (11-19)		Green Super! I understand! (20-25)	